

**Cambridge IGCSE™**CANDIDATE
NAMECENTRE
NUMBER

--	--	--	--	--

CANDIDATE
NUMBER

--	--	--	--

MATHEMATICS**0580/42**

Paper 4 Calculator (Extended)

February/March 2025**2 hours**

You must answer on the question paper.

You will need: Geometrical instruments

INSTRUCTIONS

- Answer **all** questions.
- Use a black or dark blue pen. You may use an HB pencil for any diagrams or graphs.
- Write your name, centre number and candidate number in the boxes at the top of the page.
- Write your answer to each question in the space provided.
- Do **not** use an erasable pen or correction fluid.
- Do **not** write on any bar codes.
- You should use a scientific calculator where appropriate.
- You may use tracing paper.
- You must show all necessary working clearly.
- Give non-exact numerical answers correct to 3 significant figures, or 1 decimal place for angles in degrees, unless a different level of accuracy is specified in the question.
- For π , use either your calculator value or 3.142.

INFORMATION

- The total mark for this paper is 100.
- The number of marks for each question or part question is shown in brackets [].

This document has **16** pages.



List of formulas

Area, A , of triangle, base b , height h .

$$A = \frac{1}{2}bh$$

Area, A , of circle of radius r .

$$A = \pi r^2$$

Circumference, C , of circle of radius r .

$$C = 2\pi r$$

Curved surface area, A , of cylinder of radius r , height h .

$$A = 2\pi rh$$

Curved surface area, A , of cone of radius r , sloping edge l .

$$A = \pi rl$$

Surface area, A , of sphere of radius r .

$$A = 4\pi r^2$$

Volume, V , of prism, cross-sectional area A , length l .

$$V = Al$$

Volume, V , of pyramid, base area A , height h .

$$V = \frac{1}{3}Ah$$

Volume, V , of cylinder of radius r , height h .

$$V = \pi r^2 h$$

Volume, V , of cone of radius r , height h .

$$V = \frac{1}{3}\pi r^2 h$$

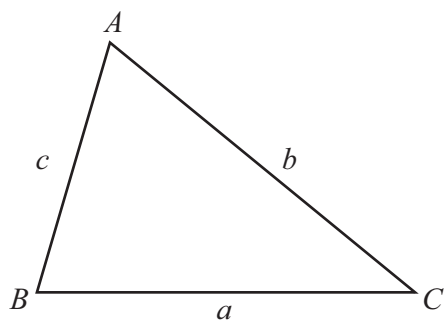
Volume, V , of sphere of radius r .

$$V = \frac{4}{3}\pi r^3$$

For the equation $ax^2 + bx + c = 0$, where $a \neq 0$,

$$x = \frac{-b \pm \sqrt{b^2 - 4ac}}{2a}$$

For the triangle shown,



$$\frac{a}{\sin A} = \frac{b}{\sin B} = \frac{c}{\sin C}$$

$$a^2 = b^2 + c^2 - 2bc \cos A$$

$$\text{Area} = \frac{1}{2}ab \sin C$$





- 1 Write down a factor of 28 that is a prime number.


..... [1]

- 2 Simplify.

$$4y^2 + 3y - y^2 + 2y$$

..... [2]

- 3



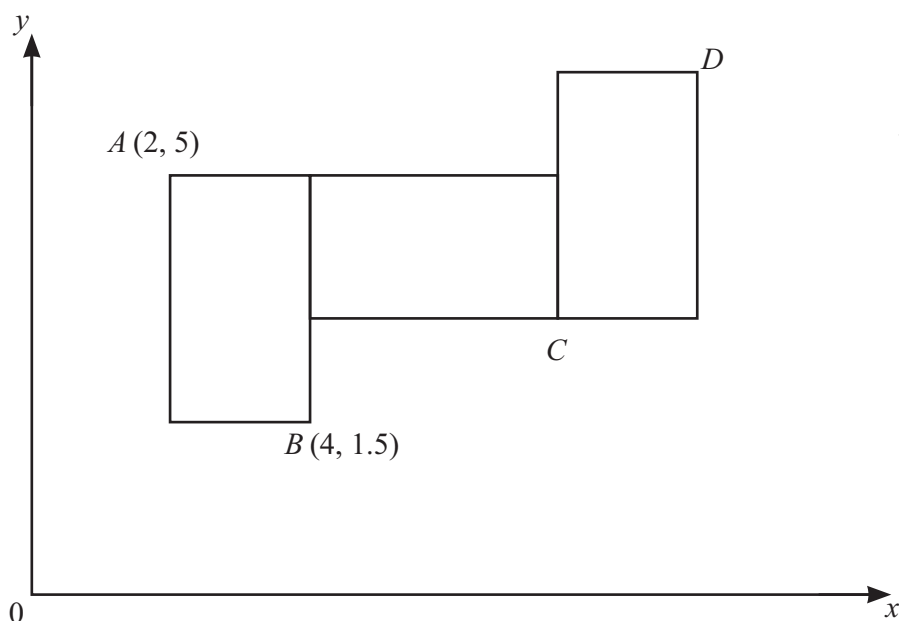
Shade **two** more small squares to make a pattern with two lines of symmetry. [1]

- 4 Calculate $\frac{20.24 - \sqrt[3]{30}}{6.5}$.

Give your answer correct to 1 decimal place.

..... [2]





NOT TO
SCALE

A pattern is formed by 3 congruent rectangles.

Each rectangle is a rotation of 90° around one vertex of the rectangle next to it.

The point A has coordinates $(2, 5)$.

The point B has coordinates $(4, 1.5)$.

Work out the coordinates of point C and point D .

C (..... ,)

D (..... ,)

[3]

- 6 Each week Nisha is paid \$12 per hour for the first 40 hours that she works.
She is paid 30% more per hour for any extra hours that she works.
One week Nisha works for 45.5 hours.

Calculate how much she is paid that week.

\$ [3]

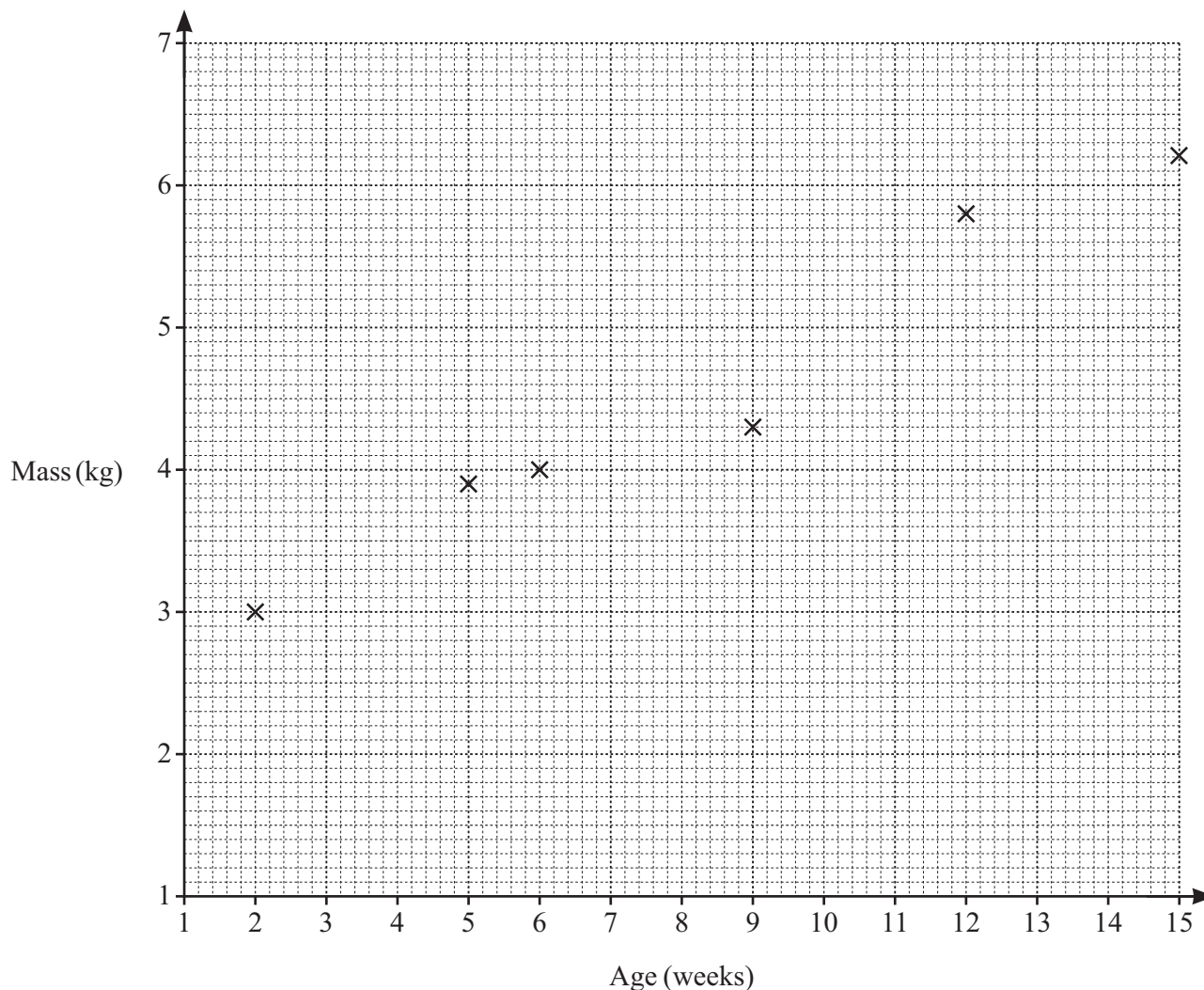




7 The table shows the age and mass of each of 10 babies.

Age (weeks)	9	12	15	2	5	6	9	7	1	11
Mass (kg)	4.3	5.8	6.2	3.0	3.9	4.0	4.6	4.5	2.5	5.3

(a)



Complete the scatter diagram.

The first six points have been plotted for you.

[2]

(b) What type of correlation is shown in the scatter diagram?

..... [1]

(c) On the scatter diagram, draw a line of best fit.

[1]

(d) Use your line of best fit to find an estimate of the mass of a 14-week old baby.

..... kg [1]





- 8 The scale drawing shows the positions of boat A and boat B .
The scale is 1 cm represents 0.5 km.

North



A

B

Scale: 1 cm to 0.5 km

- (a) Find the actual distance between boat A and boat B .

..... km [2]

- (b) Lighthouse L lies to the east of boats A and B .
 L is 4.4 km from boat A and 3.3 km from boat B .

Using a ruler and compasses only, construct and label the position of L . [3]

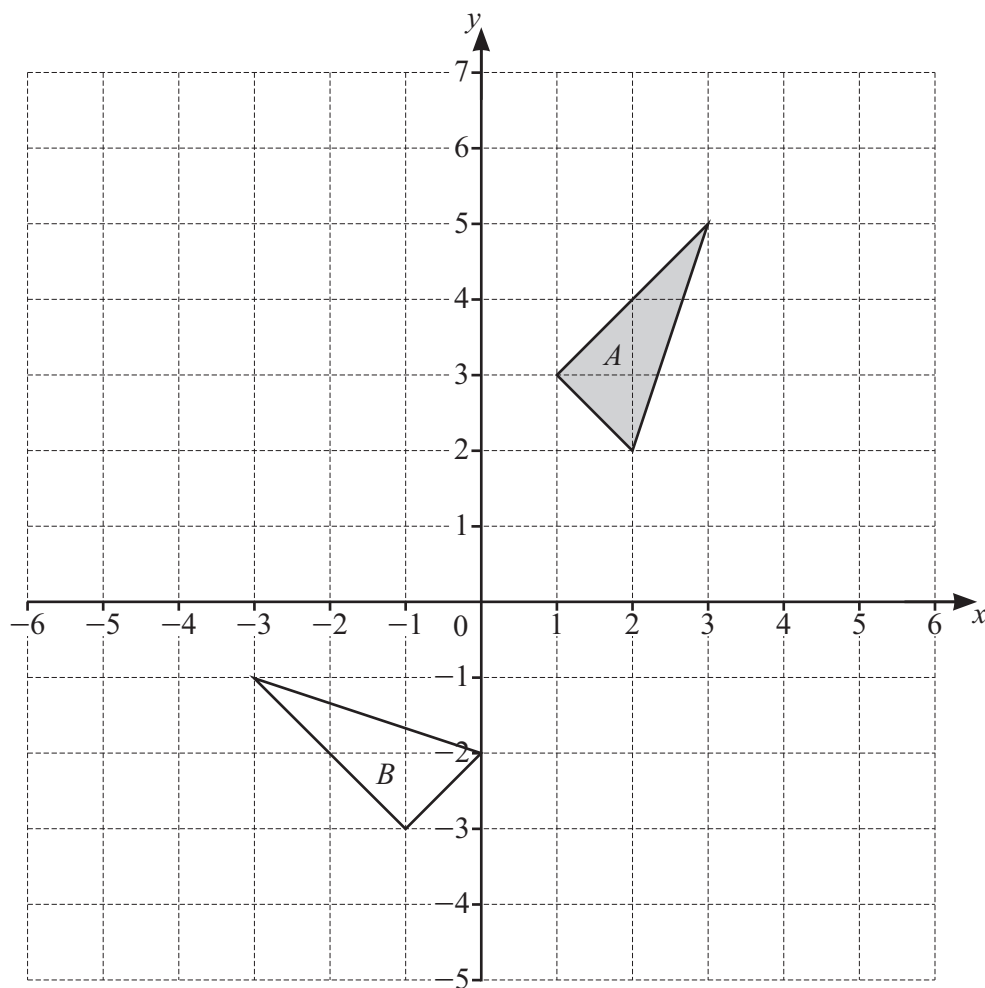
- 9 (a) Write 0.007 09 in standard form.

..... [1]

- (b) Work out $(4 \times 10^4)^2$.
Give your answer in standard form.

..... [2]





(a) Draw the image of

(i) triangle A after a reflection in the line $y = 1$ [2]

(ii) triangle A after a translation by the vector $\begin{pmatrix} -6 \\ 1 \end{pmatrix}$. [2]

(b) Describe fully the **single** transformation that maps triangle A onto triangle B .

.....

..... [3]





- 11 (a) Midhil invests \$1500 at a rate of 4.2% per year compound interest.

Calculate the value of the investment at the end of 5 years.

\$ [2]

- (b) Hitanshi invests some money at a rate of $x\%$ per year compound interest.
At the end of 11 years the value of the investment has doubled.

Calculate the value of x .

$x =$ [3]

- 12 A cone has sloping edge 12 cm and base radius 5 cm.

Calculate the **total** surface area of the cone.

..... cm^2 [2]





13 The table shows the first 5 terms of sequences A , B and C .

	1st term	2nd term	3rd term	4th term	5th term	n th term
Sequence A	5	12	31	68	129	
Sequence B	$\frac{10}{3}$	$\frac{9}{4}$	$\frac{8}{5}$	$\frac{7}{6}$	$\frac{6}{7}$	
Sequence C	4	8	16	32	64	

Complete the table to show the n th term of each sequence.

[6]

14 $f(x) = 5 - 4x$

(a) Find $f(-3)$.

..... [1]

(b) Find $f(3 - 2x)$.

Give your answer in its simplest form.

..... [2]

(c) Find $f^{-1}(x)$.

$f^{-1}(x) =$ [2]





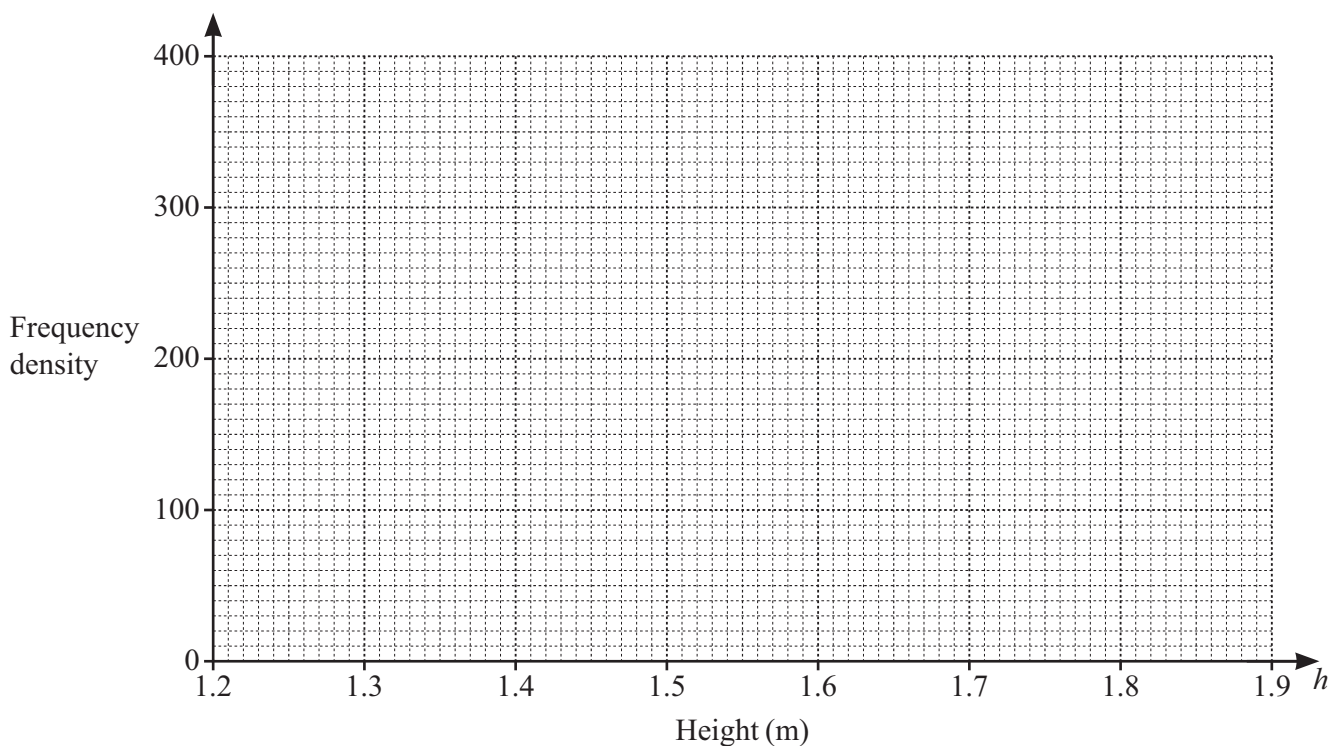
- 15 Virat records the height of each of 80 sunflowers.
The results are shown in the table.

Height (h m)	$1.2 < h \leq 1.5$	$1.5 < h \leq 1.6$	$1.6 < h \leq 1.7$	$1.7 < h \leq 1.9$
Frequency	12	20	34	14

- (a) Calculate an estimate of the mean height.

..... m [4]

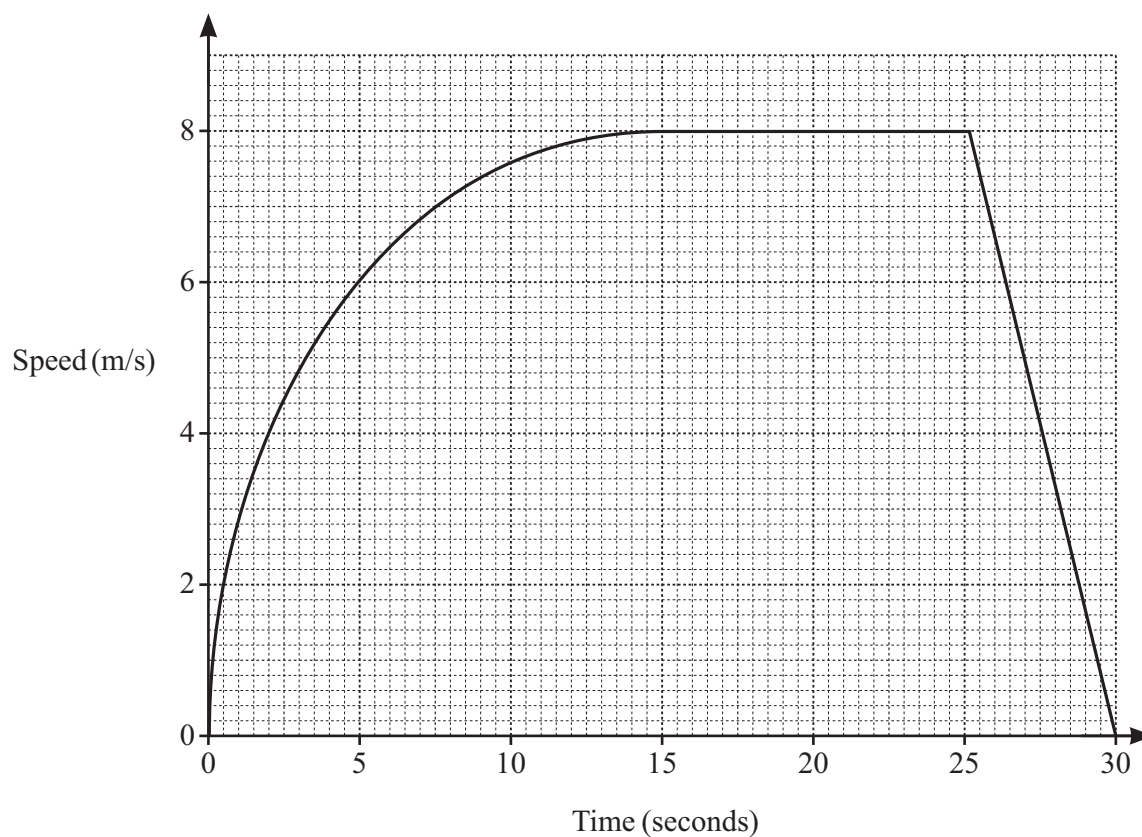
- (b) Draw a histogram to show the information in the table.



[3]



- 16 The graph shows the speed of a cyclist during a journey of 30 seconds.



- (a) Write down the acceleration of the cyclist between 15 seconds and 25 seconds.

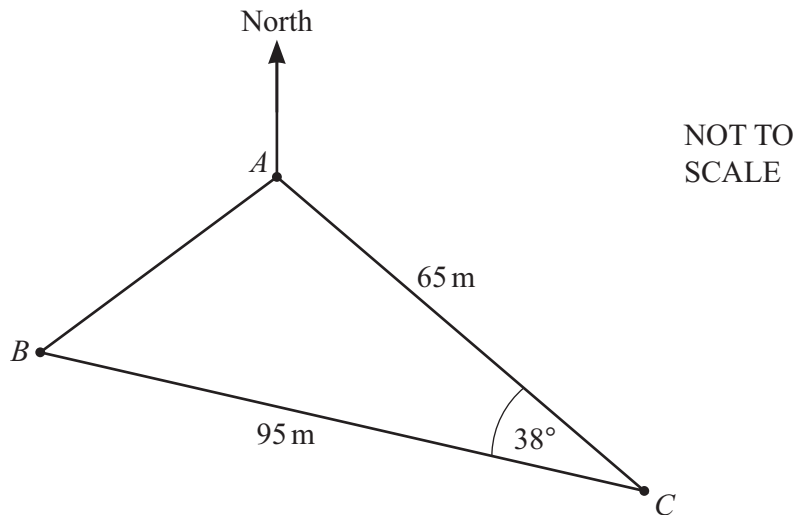
..... m/s^2 [1]

- (b) By drawing a tangent, find an estimate for the acceleration of the cyclist at 7.5 seconds.

..... m/s^2 [2]

- (c) Work out the average speed of the cyclist between 15 seconds and 30 seconds.

..... m/s [3]



The diagram shows three points A , B and C on horizontal ground.
The bearing of C from A is 145° and angle $ACB = 38^\circ$.
 $AC = 65$ m and $BC = 95$ m.

- (a) Find the bearing of B from C .

..... [2]

- (b) Show that $AB = 59.3$ m, correct to 1 decimal place.

[3]

- (c) Angle BAC is obtuse.

Work out the bearing of B from A .

..... [4]





18 (a) Factorise.

$$18a^2 - 98$$

..... [2]

(b) Expand and simplify.

$$(x+4)(2x-1)(x-2)$$

..... [3]

19 Solve the equation $2 + 5 \cos x = 0$ for $0^\circ \leq x \leq 360^\circ$.

$x =$ or $x =$ [3]



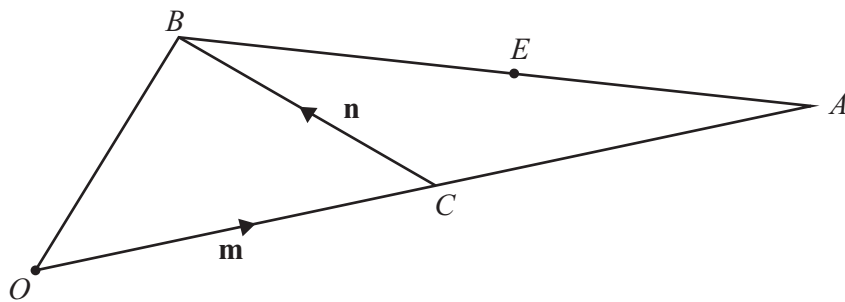


- 20 A piece of metal has volume 1240 cm^3 , correct to the nearest 20 cm^3 .
The mass of the piece of metal is 7800 g , correct to the nearest 100 g .

Calculate the lower bound of the density of the metal.
[Density = mass \div volume.]

..... g/cm^3 [3]

21



NOT TO
SCALE

OAB is a triangle.
 C is the midpoint of OA .
 $\overrightarrow{OC} = \mathbf{m}$ and $\overrightarrow{CB} = \mathbf{n}$.
 E lies on AB and $AE : EB = 4 : 5$.

Find, in terms of \mathbf{m} and \mathbf{n} , the position vector of E .
Give your answer in its simplest form.

..... [4]



- 22 The line $y = 4x + 12$ intersects the curve $y = 2x^2 - x - 3$ at point P and point Q .

Find the coordinates of P and Q .

You must show all your working and give your answers correct to 2 decimal places.

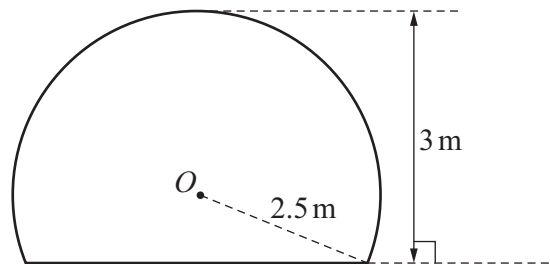
(..... ,)

(..... ,)

[6]

Question 23 is printed on the next page.





NOT TO
SCALE

The diagram shows the major segment of a circle, centre O , radius 2.5 m.
The segment is the cross section of a tunnel with height 3 m.
The length of the tunnel is 800 m and it has the same cross section throughout its length.

Calculate the volume of the tunnel.

..... m^3 [7]

Permission to reproduce items where third-party owned material protected by copyright is included has been sought and cleared where possible. Every reasonable effort has been made by the publisher (UCLES) to trace copyright holders, but if any items requiring clearance have unwittingly been included, the publisher will be pleased to make amends at the earliest possible opportunity.

To avoid the issue of disclosure of answer-related information to candidates, all copyright acknowledgements are reproduced online in the Cambridge Assessment International Education Copyright Acknowledgements Booklet. This is produced for each series of examinations and is freely available to download at www.cambridgeinternational.org after the live examination series.

Cambridge Assessment International Education is part of Cambridge Assessment. Cambridge Assessment is the brand name of the University of Cambridge Local Examinations Syndicate (UCLES), which is a department of the University of Cambridge.

